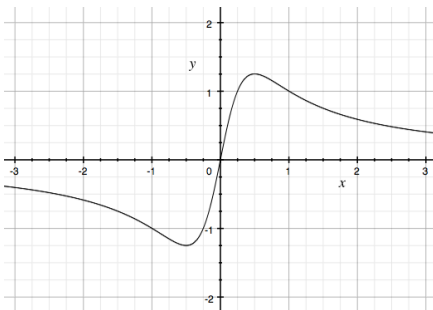
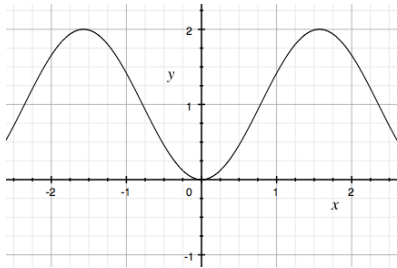
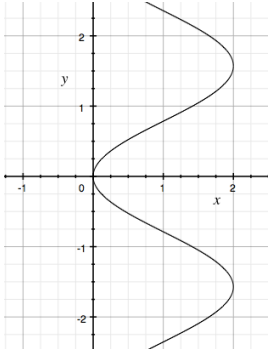


Number:
Title:

Textbook Section:



Test the following equations for symmetry.

1. $y = 2x + 3$

2. $y = \frac{1}{x}$

3. $y = x^2$

4. $x = y^2 - 3$

5. $x^2 + y^2 = 25$

6. $y = \frac{x^2}{x+1}$

7. $x = \frac{y}{y^2 + 1}$